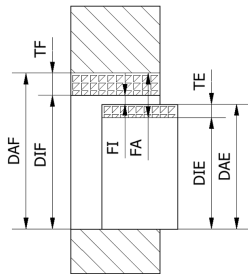


1) Calcule, monte a tabela de Ajustes e Desenhe o Gráfico com Cotas | Gráfico

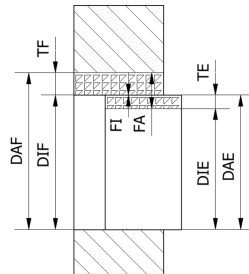
10 P8 - h12	Furo	Eixo
Tolerância-padrão		
Tolerância		
Dimensão nominal		
Afastamento fundamental		
Afastamento superior		
Afastamento inferior		
Dimensão limite		
Dimensão máxima		
Dimensão mínima		
Tipo de ajuste (interferência, folga, incerto)		
[] Interferência ou [] Folga máxima		
[] Interferência ou [] Folga [] máxima [] mínima		
Sistema de ajuste (furo ou eixo base)		

2) Seleccione o arquétipo do exercício anterior

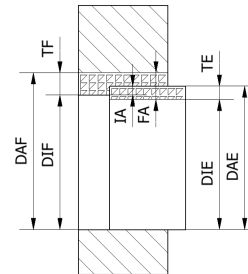
1) []



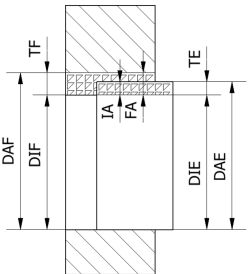
2) []



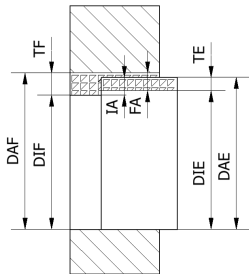
3) []



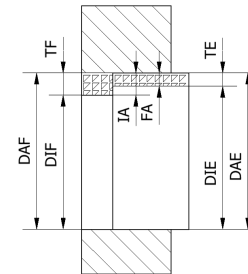
4) []



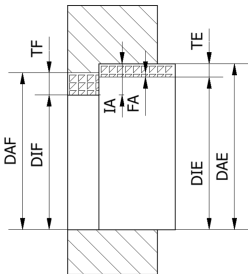
5) []



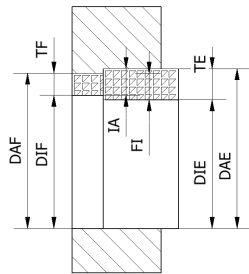
6) []



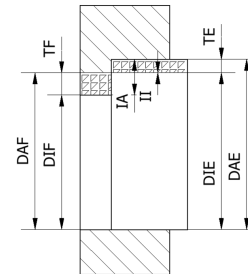
7) []



8) []



9) []



10) []

